

When you are done with your homework you should be able to...

- π Use a double integral to represent the volume of a solid region
- π Use properties of double integrals
- π Evaluate a double integral as an iterated integral

Warm-up: Evaluate the iterated integral $\int_0^{\pi} \int_0^{\pi/2} \sin^2 x \cos^2 y \, dy \, dx$.

$$\int_0^{\pi} \int_0^{\pi/2} \sin^2 x \left(\frac{1 + \cos 2y}{2} \right) dy \, dx = \int_0^{\pi} \sin^2 x \left[\frac{y}{2} + \frac{\sin 2y}{4} \right]_0^{\pi/2} dx = \frac{\pi}{4} \int_0^{\pi} \frac{1 - \cos 2x}{2} dx = \frac{\pi}{4} \left[\frac{x}{2} - \frac{\sin 2x}{4} \right]_0^{\pi} = \frac{\pi}{4} \left(\frac{\pi}{2} \right) = \frac{\pi^2}{8}$$

$$\int_0^4 \int_0^4 f(x,y) \, dy \, dx$$

ACTIVITY: The table below shows values of a function f over a square region R .

Divide the region into 16 equal squares and select (x_i, y_i) to be the point in the i th square closest to the origin. Compare this approximation with that obtained by using the point in the i th square furthest from the origin.

$$f(0,0) = 32 \rightarrow (0,0,32)$$

$$f(4,4) = 0 \rightarrow (4,4,0)$$

$y \backslash x$	0	1	2	3	4
0	32	31	28	23	16
1	31	30	27	22	15
2	28	27	24	19	12
3	23	22	19	14	7
4	16	15	12	7	0

$$\int_0^4 \int_0^4 f(x,y) \, dy \, dx \approx (32+31+28+23) + (31+30+27+22) + (28+27+24+19) + (23+22+19+14) + (16+15+12+7) = 400$$

$$\int_0^4 \int_0^4 f(x,y) \, dy \, dx \approx (30+27+22+15) + (27+24+19+12) + (22+19+14+7) + (15+12+7+0) = 272$$

DEFINITION: DOUBLE INTEGRAL

If f is defined on a closed, bounded region R in the xy -plane, then the double integral of f over R is given by

$$\iint_R f(x, y) dA = \lim_{\|\Delta\| \rightarrow 0} \sum_{i=1}^n f(x_i, y_i) \Delta A_i$$

provided the limit exists. If the limit exists, then f is integrable over R .

VOLUME OF A SOLID REGION

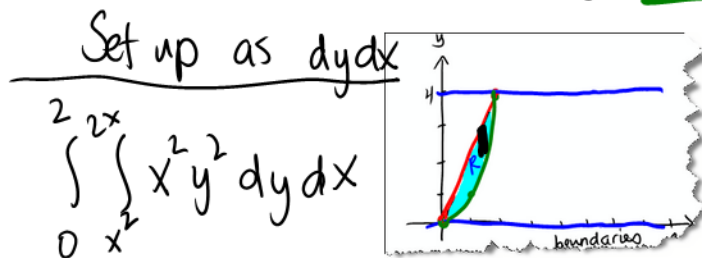
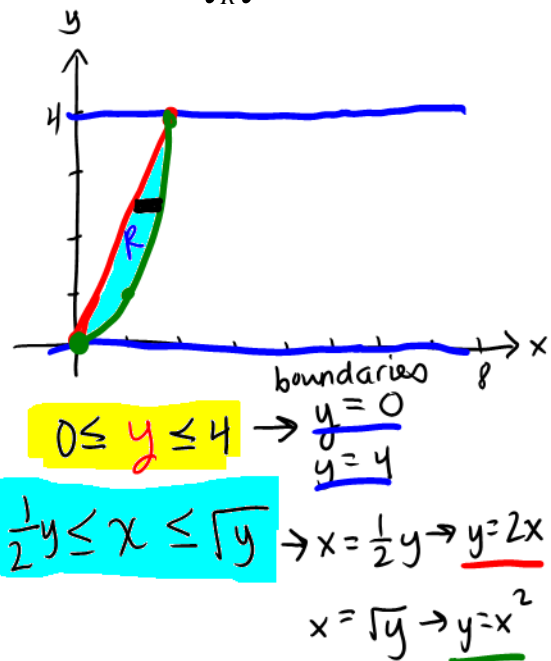
If f is integrable over a plane region R and $f(x, y) \geq 0$ for all (x, y) in R , then the volume of the solid region that lies above R and below the graph of f is defined as

$$V = \iint_R f(x, y) dA$$

Example 1: Sketch the region R and evaluate the iterated integral $\int_R f(x, y) dA$.

$$\int_0^4 \int_{\frac{1}{2}y}^{\sqrt{y}} x^2 y^2 dx dy$$

$$\begin{aligned} \int_0^4 \int_{\frac{1}{2}y}^{\sqrt{y}} x^2 y^2 dx dy &= \int_0^4 \left. y^2 \frac{x^3}{3} \right|_{\frac{1}{2}y}^{\sqrt{y}} dy \\ &= \int_0^4 y^2 \left(\frac{y^{3/2}}{3} - \frac{y^3}{24} \right) dy \\ &= \int_0^4 \left(\frac{y^{7/2}}{3} - \frac{y^5}{24} \right) dy \\ &= \left(\frac{2y^{9/2}}{27} - \frac{y^6}{144} \right) \Big|_0^4 \\ &= \left[\frac{2}{27} (512) - \frac{4096}{144} \right] - 0 \\ &= \frac{256}{27} \text{ units}^3 \end{aligned}$$



PROPERTIES OF DOUBLE INTEGRALS

Let f and g be continuous over a closed, bounded plane region R , and let c be a constant.

1. $\int_R \int cf(x, y) dA = c \int_R \int f(x, y) dA$
2. $\int_R \int [f(x, y) \pm g(x, y)] dA = \int_R \int f(x, y) dA \pm \int_R \int g(x, y) dA$
3. $\int_R \int f(x, y) dA \geq 0$, if $f(x, y) \geq 0$
4. $\int_R \int f(x, y) dA \geq \int_R \int g(x, y) dA$, if $f(x, y) \geq g(x, y)$
5. $\int_R \int f(x, y) dA = \int_{R_1} \int f(x, y) dA + \int_{R_2} \int f(x, y) dA$, where R is the union of two nonoverlapping subregions R_1 and R_2

THEOREM: FUBINI'S THEOREM

Let f be continuous on a plane region R .

1. If R is defined by $a \leq x \leq b$ and $g_1(x) \leq y \leq g_2(x)$, where g_1 and g_2 are continuous on $[a, b]$, then

$$\int_R \int f(x, y) dA = \int_a^b \int_{g_1(x)}^{g_2(x)} f(x, y) dy dx$$

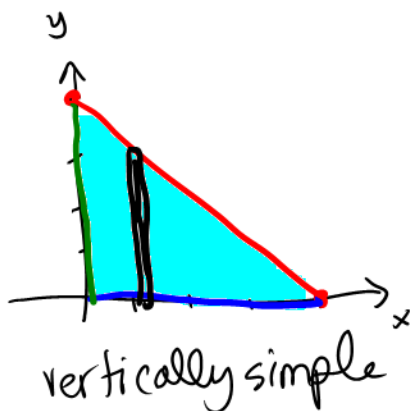
2. If R is defined by $c \leq y \leq d$ and $h_1(y) \leq x \leq h_2(y)$, where h_1 and h_2 are continuous on $[c, d]$, then

$$\int_R \int f(x, y) dA = \int_c^d \int_{h_1(y)}^{h_2(y)} f(x, y) dx dy$$

Example 2: Set up an integrated integral for both orders of integration, and use the more convenient order to evaluate over the region R .

$$\int_R \int xe^y dA,$$

R : triangle bounded by $y = 4 - x$, $y = 0$, $x = 0$



$$\int_0^4 \int_0^{4-x} xe^y dy dx = \int_0^4 xe^y \Big|_0^{4-x} dx$$

$$= \int_0^4 x(e^{4-x} - e^0) dx = \int_0^4 (xe^{4-x} - x) dx$$

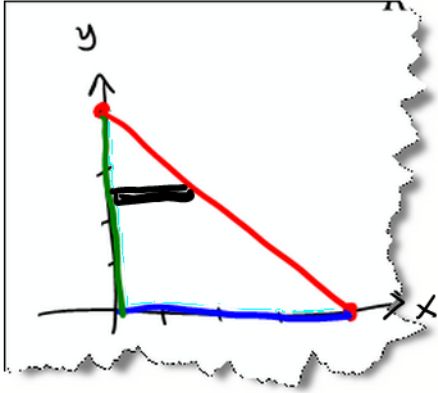
$$= (-4e^0 - e^0 - \frac{16}{2}) - (-0e^4 - 0) = -5 - 8 + e^4 = e^4 - 13$$

Handwritten notes for integration by parts:

$$u = x, du = dx$$

$$dv = e^{4-x} dx, v = -e^{4-x}$$

$$\int xe^{4-x} dx = -xe^{4-x} + \int e^{4-x} dx = -xe^{4-x} - e^{4-x}$$



horizontally simple

$$\int_0^4 \int_0^{4-y} x e^y dx dy$$

$y=4-x,$
 $x=4-y$

Harder to integrate!

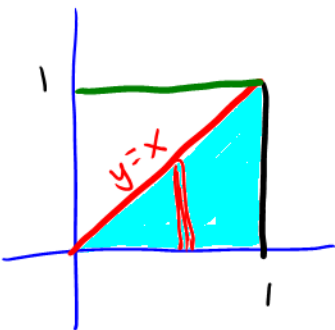
Example 3: Set up a double integral to find the volume of the solid bounded by the graphs of the equations $x^2 + z^2 = 1$, $y^2 + z^2 = 1$, **first octant**.

$$z = \sqrt{1-x^2}, z = \sqrt{1-y^2} \quad \underline{z \geq 0}$$

$$\sqrt{1-x^2} = \sqrt{1-y^2}$$

$$x = y$$

$$\text{if } z=0 \rightarrow x=y=1$$



$$V = 2 \int_0^1 \int_0^x \sqrt{1-x^2} dy dx$$

$$V = 2 \int_0^1 \sqrt{1-x^2} (y) \Big|_0^x dx$$

$$V = 2 \int_0^1 \frac{1}{2} x \sqrt{1-x^2} dx$$

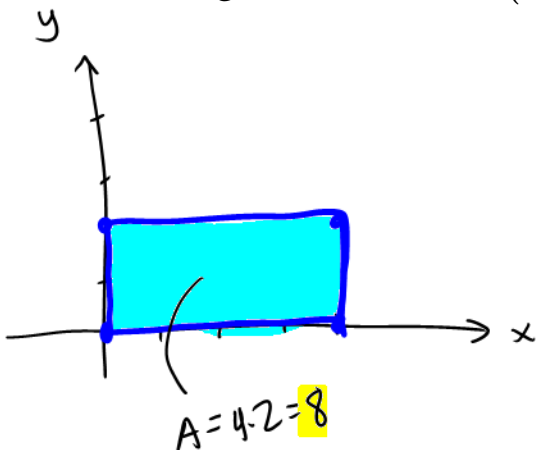
$$V = -\frac{2}{3} (1-x^2)^{3/2} \Big|_0^1$$

Example 4: Find the average value of $f(x, y)$ over the region R where $V = -\frac{2}{3}(0-1)$

Average value = $\frac{1}{A} \int_R \int f(x, y) dA$, where A is the area of R .

$$f(x, y) = xy.$$

R : rectangle with vertices $(0,0)$, $(4,0)$, $(4,2)$ and $(0,2)$.



$$\text{Average Value} = \frac{1}{8} \int_0^4 \int_0^2 xy dy dx$$

$$= \frac{1}{8} \int_0^4 x \left(\frac{y^2}{2} \Big|_0^2 \right) dx$$

$$= \frac{1}{16} \int_0^4 x (2^2 - 0^2) dx$$

$$= \frac{1}{4} \int_0^4 x dx$$

$$= \frac{1}{4} \cdot \frac{x^2}{2} \Big|_0^4$$

$$= \frac{1}{8} (4^2 - 0^2)$$

$$= \boxed{2}$$

$$V = \frac{2}{3} \text{ cubic units}$$